


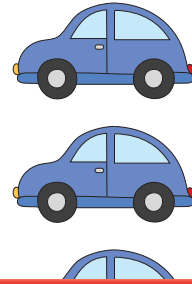
Multiplication with Arrays

Count the number of rows and columns in each array and complete the multiplication sentence.

1)



2)




Preview

Ho

Become a member to unlock
unrestricted access to both printable
and online worksheets.

3)

www.tutoringhour.com



How many rows are there?

How many columns are there?

Multiplication Sentence:

$$\square \times \square = \square$$



How many rows are there?

How many columns are there?

Multiplication Sentence:

$$\square \times \square = \square$$