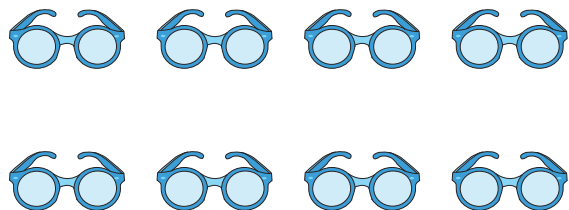



# Multiplication with Arrays

Complete the multiplication sentence that describes each array.

1)



2)



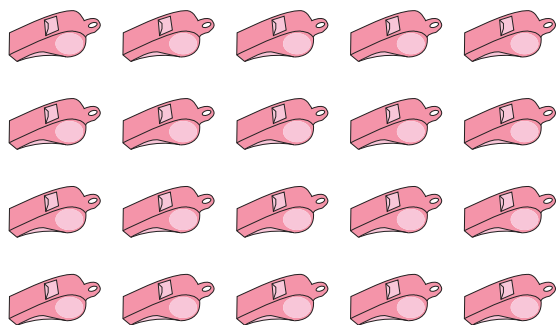
3)

**Become a member to unlock  
unrestricted access to both printable  
and online worksheets.**



[www.tutoringhour.com](http://www.tutoringhour.com)

5)



$$\square \times 5 = 20$$

6)



$$5 \times \square = 15$$