

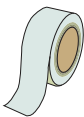
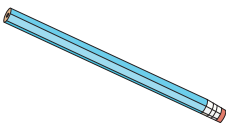




Adding Money

Read the list, write the price of each item, and find the total amount.

					
73¢	10¢	17¢	15¢	28¢	55¢

1)			2)		
<h1>Preview</h1> <p>Become a member to unlock unrestricted access to both printable and online worksheets.</p> <p>www.tutoringhour.com</p>					
3)					
5)					
					
	Total		Total		

7) How much would you have to pay in total to buy the tape and the pencil?

