





Exchanging Coins

A) Write how many coins of the other denomination you will need to make the values equivalent.

<p>1)</p> <p>35  = <input style="width: 60px; height: 30px; border: 1px solid black;" type="text"/> </p>	<p>2)</p> <p>4  = <input style="width: 60px; height: 30px; border: 1px solid black;" type="text"/> </p>
---	---

Preview

**Become a member to unlock
unrestricted access to both printable
and online worksheets.**



www.tutoringhour.com

5 pennies

2 nickels

2) Which of the following has the same value as 5 nickels?

1 quarter

1 dime