





Exchanging Coins

A) Write how many coins of the other denomination you will need to make the values equivalent.

<p>1)</p> <p>3  = <input style="width: 80px; height: 40px; border: 1px solid black;" type="text"/> </p>	<p>2)</p> <p>16  = <input style="width: 80px; height: 40px; border: 1px solid black;" type="text"/> </p>
--	--

Preview

**Become a member to unlock
unrestricted access to both printable
and online worksheets.**

www.tutoringhour.com

1 dime

1 quarter

2) Which of the following has the same value as 1 quarter?

15 nickels

25 pennies