





Combination of Coins

Show two different ways to make the given amounts.

1)

60¢

 _____	 _____	 _____	 _____
---	---	--	---

			
---	---	--	---

2)

Preview

Become a member to unlock
unrestricted access to both printable
and online worksheets.







www.tutoringhour.com





3)

			
---	---	--	---

4)

36¢

			
---	---	--	---

			
---	---	--	---