






Counting Quarters

Count the quarters in each set and write the total value in dollars.

1)		\$ _____
2)		_____
3)	<div style="border: 2px solid red; padding: 10px; text-align: center;"> <h2 style="color: blue;">Preview</h2> <p style="color: blue; font-size: 1.2em;">Become a member to unlock unrestricted access to both printable and online worksheets.</p> <p style="color: blue;">www.tutoringhour.com</p>  </div>	
4)		
5)		
6)		\$ _____
7)		\$ _____