






Counting Nickels

Count the nickels in each set and write the total value in cents.

1)		_____ ¢		
2)		_____ ¢		
3)	<div style="border: 2px solid red; padding: 20px; text-align: center;"> <h2 style="color: blue;">Preview</h2> <p style="color: blue; font-size: 1.2em;">Become a member to unlock unrestricted access to both printable and online worksheets.</p> <p style="color: blue;">www.tutoringhour.com</p>  </div>			
4)				
5)				
6)				_____ ¢
7)				_____ ¢