






Counting Nickels

Count the nickels in each set and write the total value in cents.

1) 	_____ ¢
2) 	_____ ¢
<div style="border: 2px solid red; padding: 10px; text-align: center;"> <h2 style="color: blue;">Preview</h2> <p style="color: blue; font-size: 1.2em;">Become a member to unlock unrestricted access to both printable and online worksheets.</p> <p style="color: blue;">www.tutoringhour.com</p>  </div>	_____ ¢
	_____ ¢
	_____ ¢
	_____ ¢
6) 	_____ ¢
7) 	_____ ¢