








Counting Dimes

Count the dimes in each set and write the total value in cents.

| | | |
|----|---|---------|
| 1) |  | _____ ¢ |
| 2) |  | _____ ¢ |
| 3) |  | _____ ¢ |
| 4) |  | _____ ¢ |
| 5) |  | _____ ¢ |
| 6) |  | _____ ¢ |
| 7) |  | _____ ¢ |

Preview

Become a member to unlock
unrestricted access to both printable
and online worksheets.

www.tutoringhour.com

