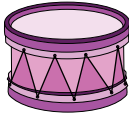







Counting Coins & Bills

Add up the total value of each set of bills and coins. Choose an item that costs exactly that amount and write the letter representing it.

A	B	C	D	E	F
					
\$7.35	\$22.76	\$50.48	\$31.00	\$20.85	\$16.51

1)



2)



3)



4)



5)