

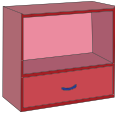

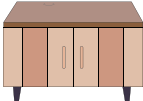
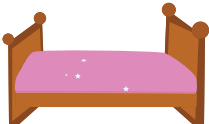


# Counting Coins & Bills

Add up the total value of each set of bills and coins. Choose an item that costs exactly that amount and write the letter representing it.

A	B	C	D	E	F
					
\$35.55	\$22.81	\$45.20	\$71.06	\$55.40	\$120.05

1)

# Preview

2)

Become a member to unlock  
unrestricted access to both printable  
and online worksheets.

3)

[www.tutoringhour.com](http://www.tutoringhour.com)

4)



5)

