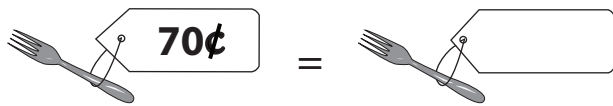






Money Conversion

A) Convert cents to dollars.

<p>1)</p> 	<p>2)</p> 
<p>3)</p> 	<p>4)</p> 
<p>5)</p> <div style="border: 2px solid red; padding: 10px; background-color: #e0f0ff;"> <h2 style="color: #0070c0;">Preview</h2> <p style="color: #0070c0; font-weight: bold;">Become a member to unlock unrestricted access to both printable and online worksheets.</p> <p style="color: #0070c0;">www.tutoringhour.com</p>  </div>	
<p>3)</p> 	<p>4)</p> 

5) Fiona paid 7.75 dollars to the cashier at the store. Express the amount paid by Fiona in cents.
