





Comparing Money

Compare the prices of the products in store A and store B and determine which store sells each product at a lower price and check the appropriate box.

Store A		Store B	
			
\$12.74	\$11.99	\$11.99	\$15.95

Preview

Become a member to unlock
unrestricted access to both printable
and online worksheets.



www.tutoringhour.com

- 1)
- 2)
- 3)  Store A Store B
- 4)  Store A Store B
- 5)  Store A Store B