

# Lines, Rays, and Line Segments

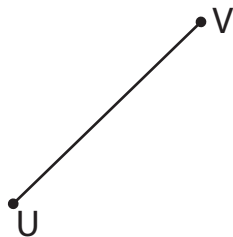
Name each line, ray, or line segment.

1)



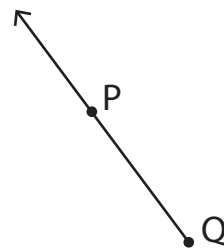

---

2)



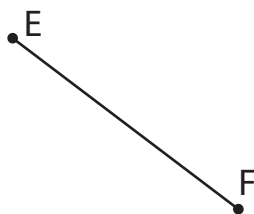

---

3)




---

4)



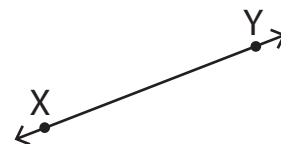

---

5)



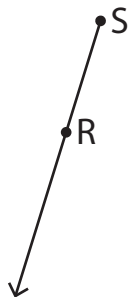

---

6)




---

7)




---

8)




---

9)




---