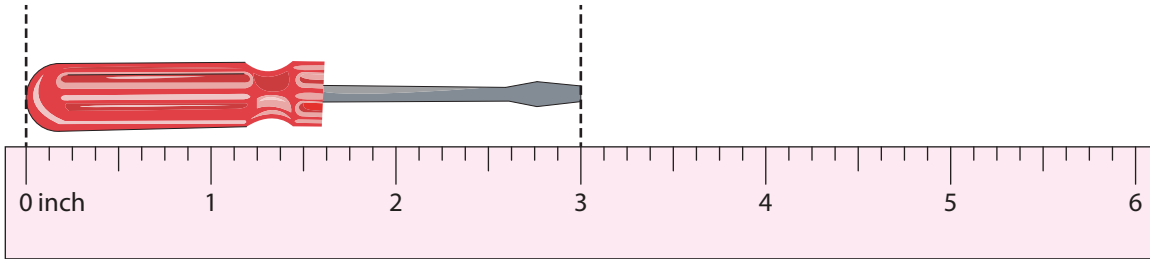


# Measuring Objects Using a Ruler | Inches

Measure each object using the ruler.

1)



\_\_\_\_\_ inches

2)

**Preview**

**Become a member to unlock  
unrestricted access to both printable  
and online worksheets.**

[www.tutoringhour.com](http://www.tutoringhour.com)

\_\_\_\_\_ inches

3)

**Preview**

**Become a member to unlock  
unrestricted access to both printable  
and online worksheets.**

[www.tutoringhour.com](http://www.tutoringhour.com)

\_\_\_\_\_ inches

4)

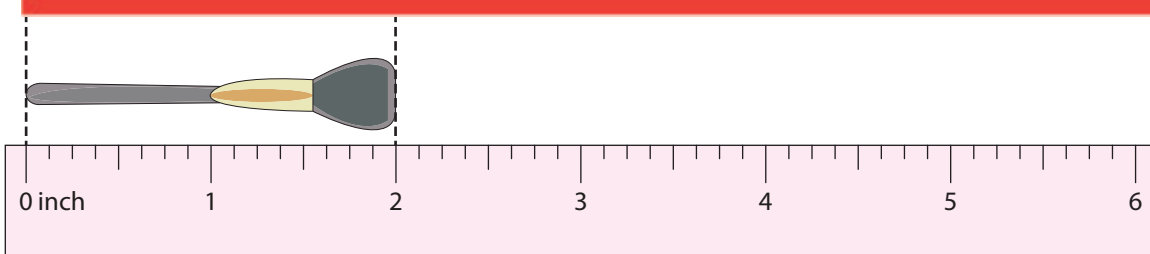
**Preview**

**Become a member to unlock  
unrestricted access to both printable  
and online worksheets.**

[www.tutoringhour.com](http://www.tutoringhour.com)

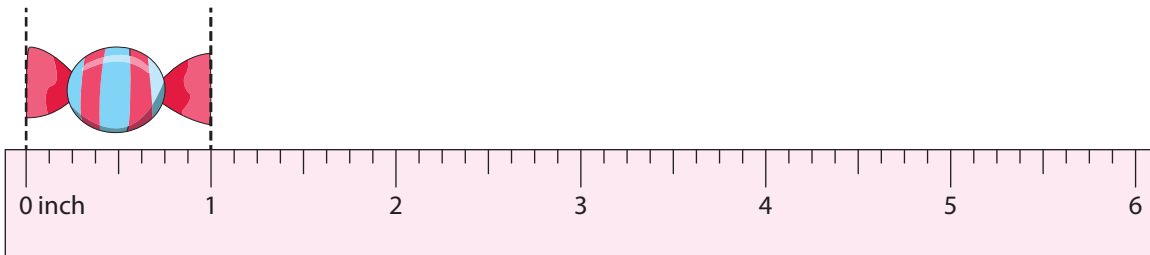
\_\_\_\_\_ inches

5)



\_\_\_\_\_ inches

6)



\_\_\_\_\_ inches