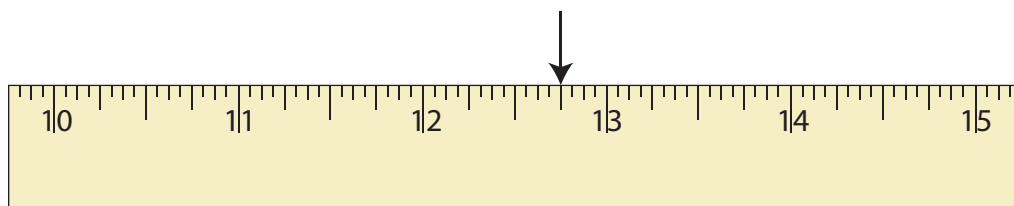


# Reading a Ruler | Inches

Write the reading indicated by the pointer on each ruler.

1)



\_\_\_\_\_ inches

2)

**Preview**  
 Become a member to unlock  
 unrestricted access to both printable  
 and online worksheets.  
 www.tutoringhour.com

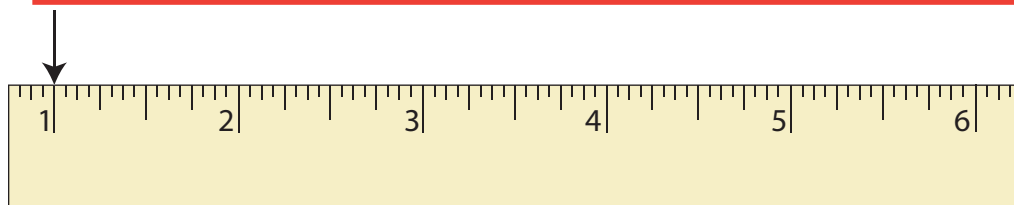
3)

**Preview**  
 Become a member to unlock  
 unrestricted access to both printable  
 and online worksheets.  
 www.tutoringhour.com

4)

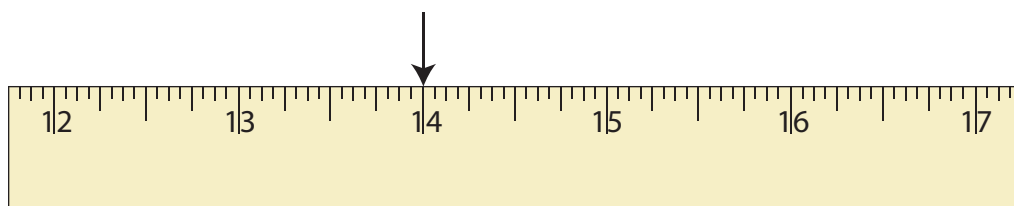
**Preview**  
 Become a member to unlock  
 unrestricted access to both printable  
 and online worksheets.  
 www.tutoringhour.com

5)



\_\_\_\_\_ inch

6)



\_\_\_\_\_ inches