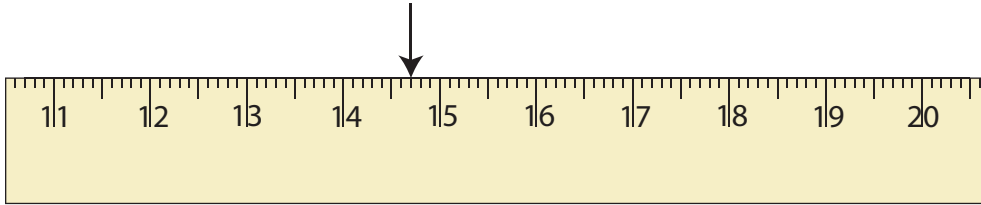


Reading a Ruler | cm and mm

Write the reading indicated by the pointer on each ruler.

1)



_____ cm _____ mm

2)

Preview

Become a member to unlock
unrestricted access to both printable
and online worksheets.

www.tutoringhour.com


3)

_____ cm _____ mm

4)

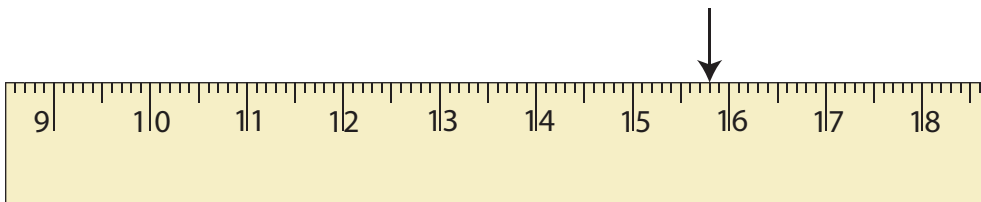
_____ cm _____ mm

5)



_____ cm _____ mm

6)



_____ cm _____ mm