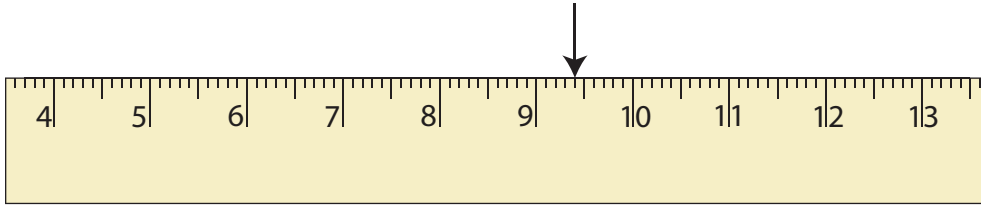


# Reading a Ruler | cm and mm

Write the reading indicated by the pointer on each ruler.

1)



\_\_\_\_\_ cm \_\_\_\_\_ mm


2)

\_\_\_\_\_ mm

\_\_\_\_\_ mm

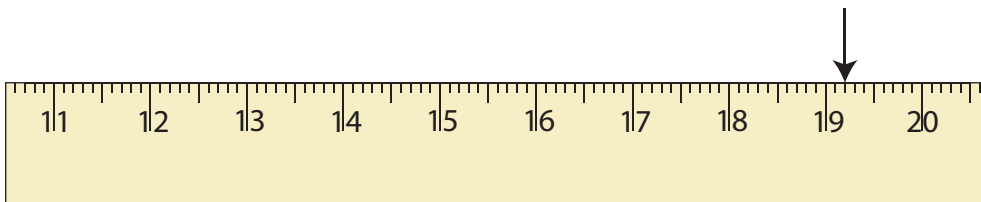
\_\_\_\_\_ mm

5)



\_\_\_\_\_ cm \_\_\_\_\_ mm

6)



\_\_\_\_\_ cm \_\_\_\_\_ mm