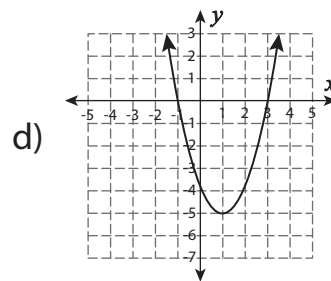
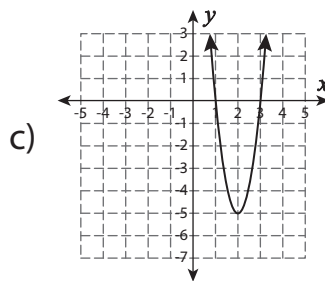
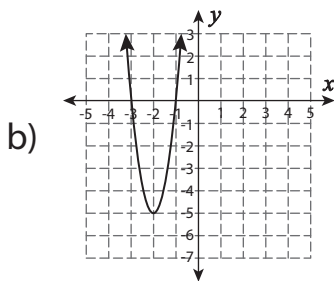
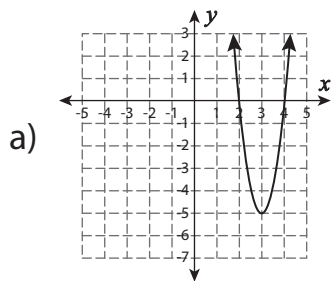


Graphing Quadratic Functions

- 1) Which of the following is the graph of $f(x) = 5x^2 - 20x + 15$?



- 2) Which of the following is the graph of $f(x) = -x^2 + 6x - 7$?

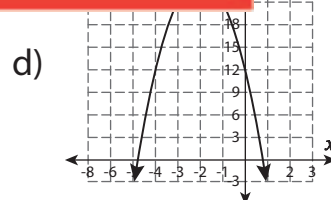
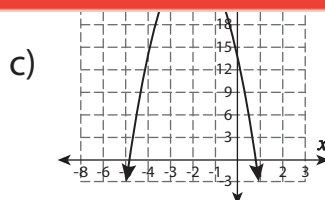
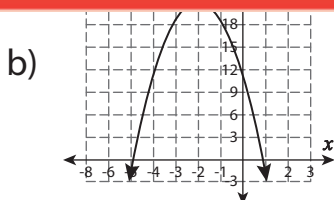
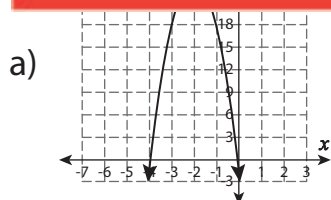
Preview

Become a member to unlock
unrestricted access to both printable
and online worksheets.

www.tutoringhour.com

3)

4)



- 5) Which of the following is the graph of $f(x) = x^2 - 2x$?

