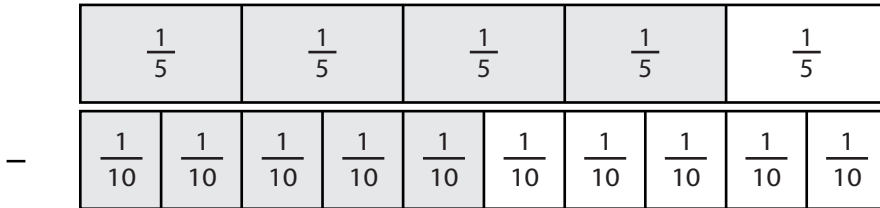


Subtracting Fractions Using Visual Models

Observe each fraction model and complete the subtraction equation.

1)



$$\frac{4}{5} - \frac{5}{10} =$$

2)

Preview

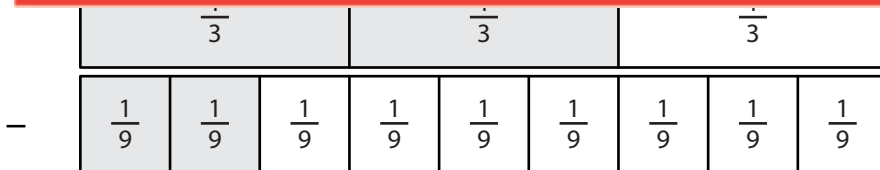
Become a member to unlock
unrestricted access to both printable
and online worksheets.



www.tutoringhour.com

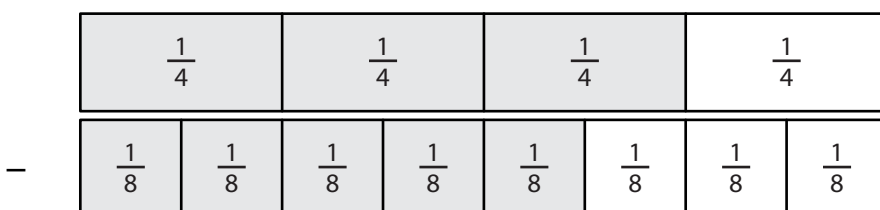
3)

4)



$$\frac{2}{3} - \frac{2}{9} =$$

5)



$$\frac{3}{4} - \frac{5}{8} =$$