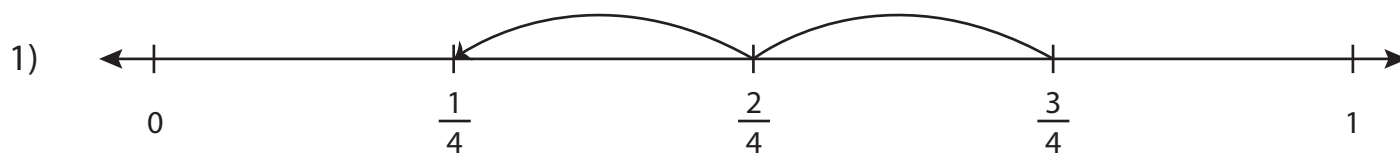


Subtracting Fractions on a Number Line

Write the subtraction sentence that describes each model.



$$\underline{\quad} - \underline{\quad} = \underline{\quad}$$

2)

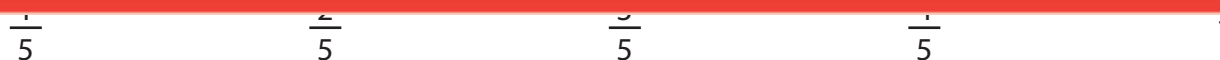
Preview

Become a member to unlock
unrestricted access to both printable
and online worksheets.



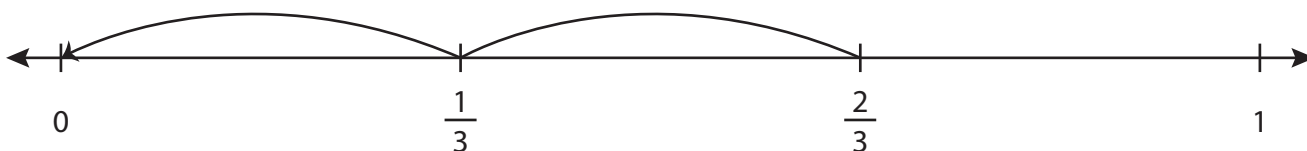
www.tutoringhour.com

4)



$$\underline{\quad} - \underline{\quad} = \underline{\quad}$$

5)



$$\underline{\quad} - \underline{\quad} = \underline{\quad}$$