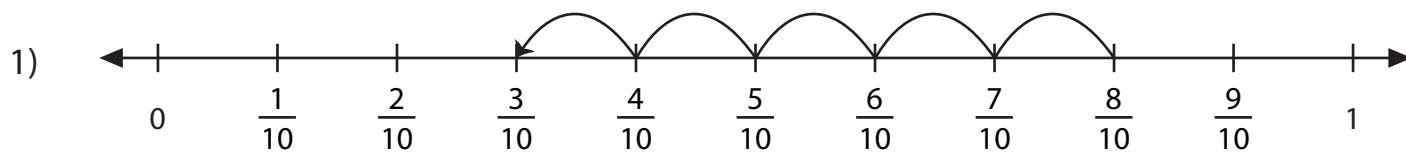
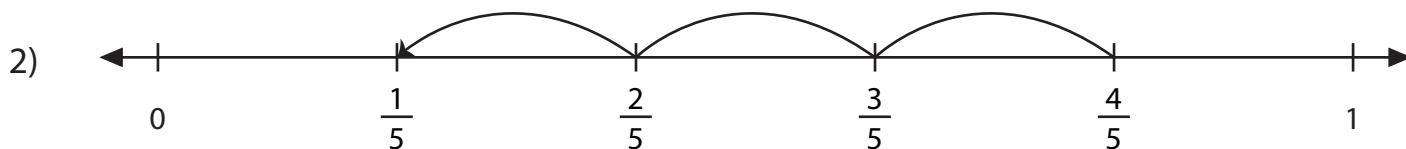


Subtracting Fractions on a Number Line

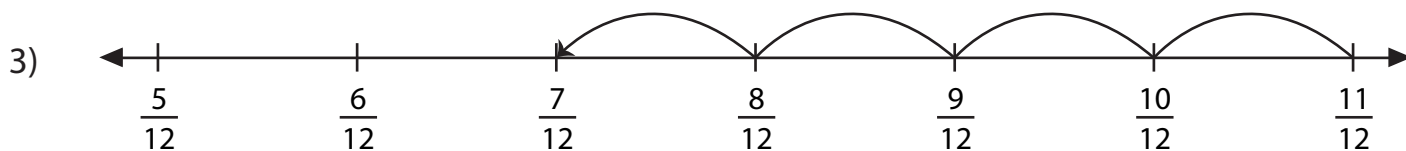
Complete each subtraction sentence using the number line.



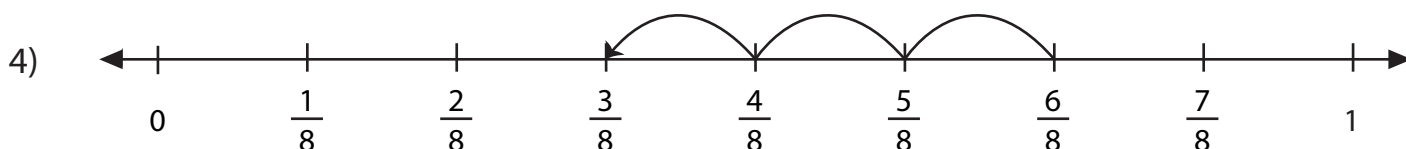
$$\frac{8}{10} - \frac{5}{10} = \underline{\hspace{2cm}}$$



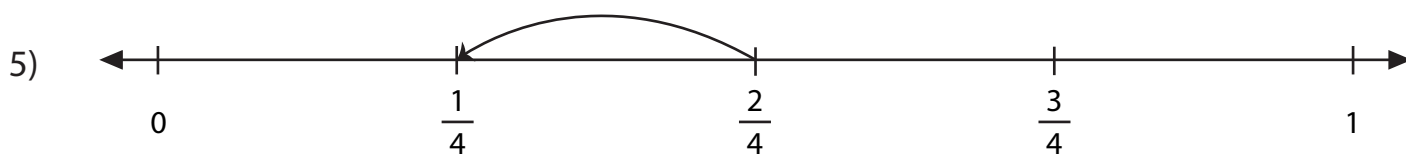
$$\frac{4}{5} - \frac{3}{5} = \underline{\hspace{2cm}}$$



$$\frac{11}{12} - \frac{4}{12} = \underline{\hspace{2cm}}$$



$$\frac{6}{8} - \frac{3}{8} = \underline{\hspace{2cm}}$$



$$\frac{2}{4} - \frac{1}{4} = \underline{\hspace{2cm}}$$