



# Simplifying Fractions

Simplify each fraction using the given models.

1

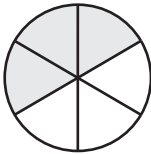


=

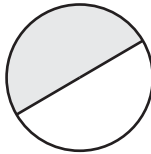


$\frac{10}{12}$  =

2



=



$\frac{3}{6}$  =

## Preview

Become a member to unlock  
unrestricted access to both printable  
and online worksheets.



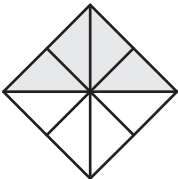
[www.tutoringhour.com](http://www.tutoringhour.com)

5

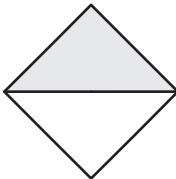
$\frac{9}{16}$  = \_\_\_\_\_

$\frac{4}{4}$  = \_\_\_\_\_

7

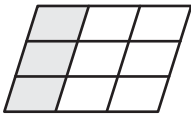


=




$\frac{4}{8}$  = \_\_\_\_\_

8



=



$\frac{3}{9}$  = \_\_\_\_\_