



Simplifying Fractions

Simplify each fraction using the given models.

1




=

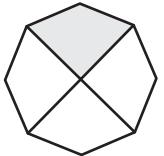


$\frac{2}{10}$ = _____

2



=



$\frac{2}{8}$ = _____

Preview

Become a member to unlock
unrestricted access to both printable
and online worksheets.



www.tutoringhour.com

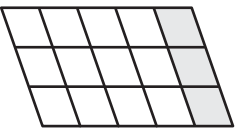
5

$\frac{3}{12}$ = _____

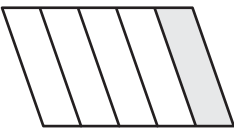
5

$\frac{1}{6}$ = _____

7

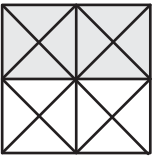


=




$\frac{3}{15}$ = _____

8



=



$\frac{8}{16}$ = _____