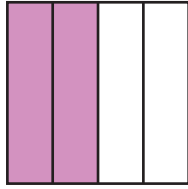


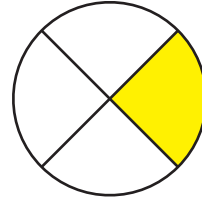
# Identifying Fourths

A) Write what part of each shape is shaded.

1)



2)



B)

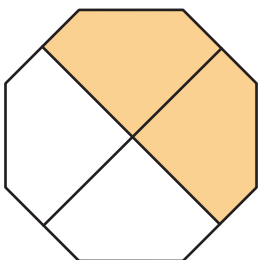
## Preview

Become a member to unlock  
unrestricted access to both printable  
and online worksheets.

www.tutoringhour.com



C)



1) What part of the octagon is shaded?

2) How many fourths make a whole?

3) What part of the octagon is left unshaded?