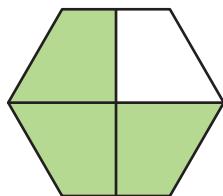



# Identifying Fourths

A) Write what part of each shape is shaded.

1)



2)



B)

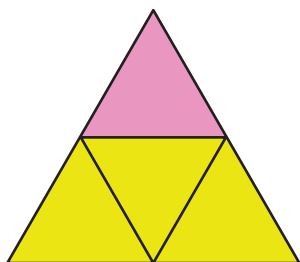
## Preview

Become a member to unlock  
unrestricted access to both printable  
and online worksheets.

www.tutoringhour.com



C)



1) What part of the triangle is pink?

2) What part of the triangle is yellow?

3) How many fourths make a whole?