


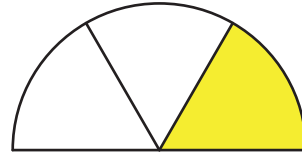
# Identifying Thirds

A) Write what part of each shape is shaded.

1)



2)



B)

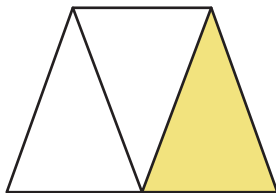
## Preview

Become a member to unlock  
unrestricted access to both printable  
and online worksheets.

www.tutoringhour.com



C)



1) What part of the trapezoid is left unshaded?

2) How many thirds make a whole?

3) What part of the trapezoid is yellow?