


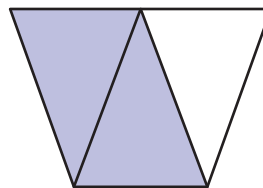
# Identifying Thirds

A) Write what part of each shape is shaded.

1)



2)



B)

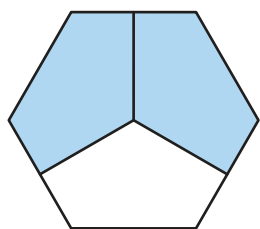
## Preview

Become a member to unlock  
unrestricted access to both printable  
and online worksheets.



[www.tutoringhour.com](http://www.tutoringhour.com)

C)



1) How many thirds make a whole?

2) What part of the hexagon is left unshaded?

3) What part of the hexagon is blue?