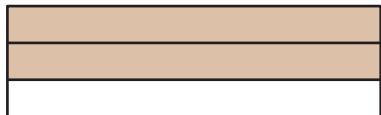


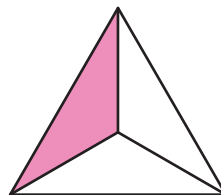
Identifying Thirds

A) Write what part of each shape is shaded.

1)



2)



B)

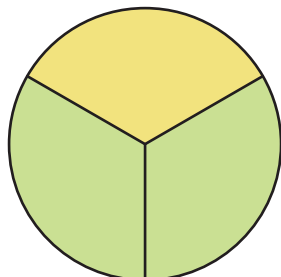
Preview

Become a member to unlock
unrestricted access to both printable
and online worksheets.



www.tutoringhour.com

C)



1) What part of the circle is yellow?

2) What part of the circle is green?

3) How many thirds make a whole?