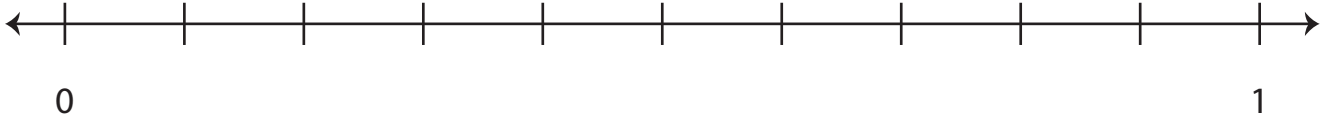


# Fractions on a Number Line

A) Plot the given fraction on each number line.

1)  $\frac{9}{10}$




2)  $\frac{3}{10}$

## Preview

Become a member to unlock  
unrestricted access to both printable  
and online worksheets.

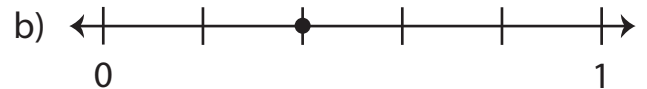
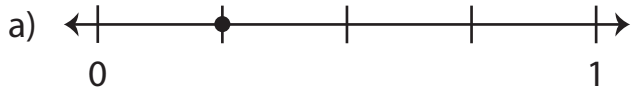
www.tutoringhour.com



A horizontal number line with arrows at both ends. It is marked with 0 at the left end and 1 at the right end. There are 10 equal intervals between 0 and 1, each marked with a vertical tick line.

B) 1

2) Which number line represents the fraction  $\frac{2}{5}$  ?



3) Which number line represents the fraction  $\frac{7}{8}$  ?

