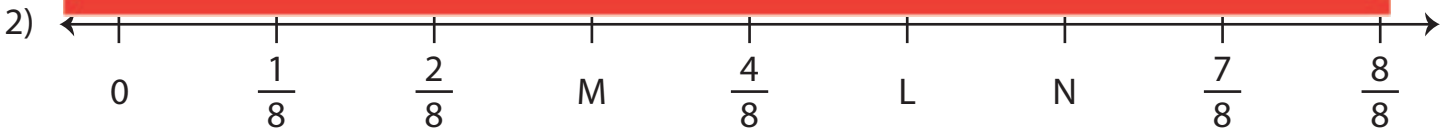

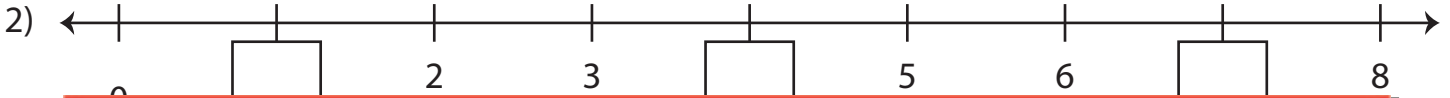
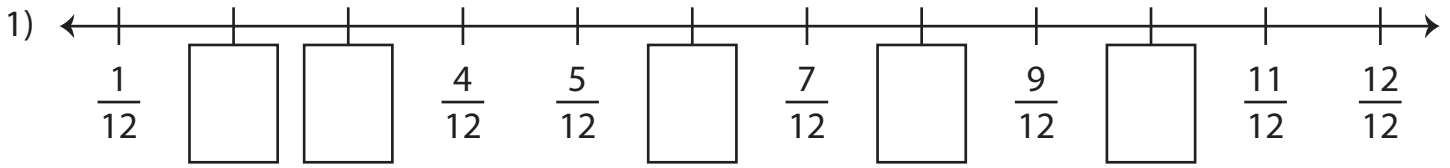
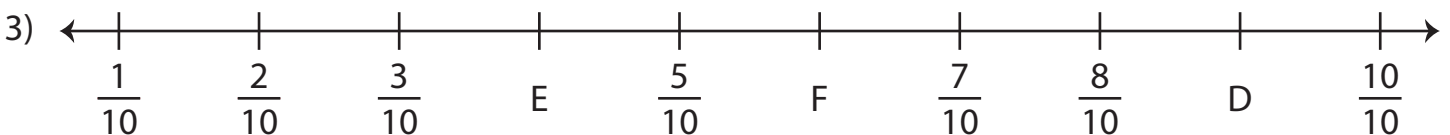


# Fractions on a Number Line

A) Fill in the missing fractions on each number line.



$$L = \underline{\hspace{2cm}} ; M = \underline{\hspace{2cm}} ; N = \underline{\hspace{2cm}}$$



$$D = \underline{\hspace{2cm}} ; E = \underline{\hspace{2cm}} ; F = \underline{\hspace{2cm}}$$

**Preview**

Become a member to unlock  
unrestricted access to both printable  
and online worksheets.

www.tutoringhour.com

