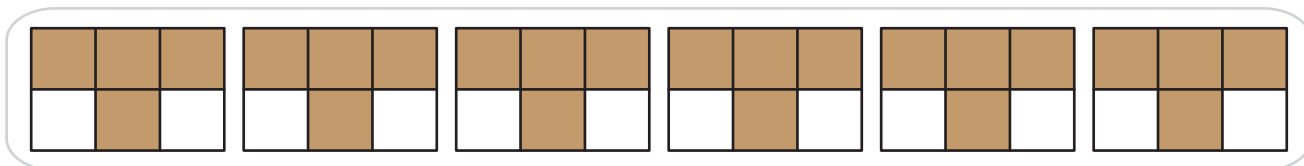


Multiplying Fractions | Models

A) 1)



a) How many $\frac{1}{6}$ parts in the model above are shaded?

$$6 \times \frac{4}{6} = \underline{\hspace{2cm}} \times \frac{1}{6}$$

2

Preview

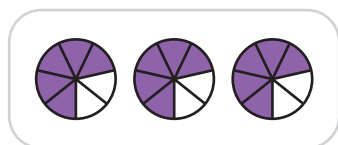
Become a member to unlock
unrestricted access to both printable
and online worksheets.



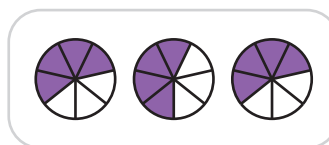
www.tutoringhour.com

B) 1

a)



b)



2) Which model represents the product $7 \times \frac{2}{3}$?

a)



b)

