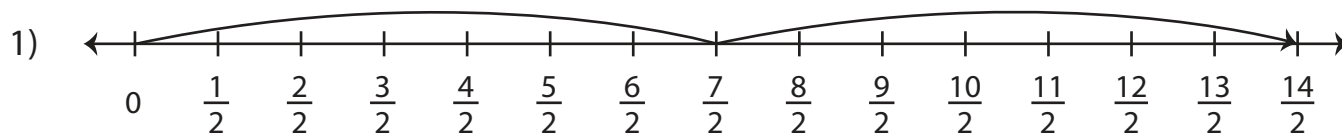
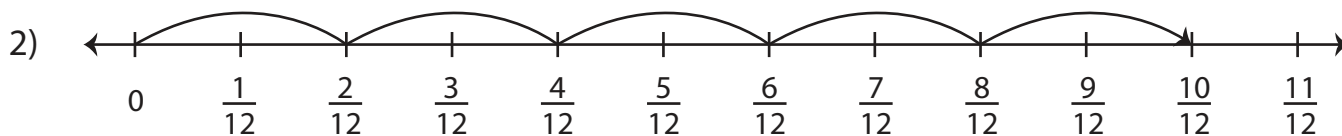


Multiplying Fractions on a Number Line

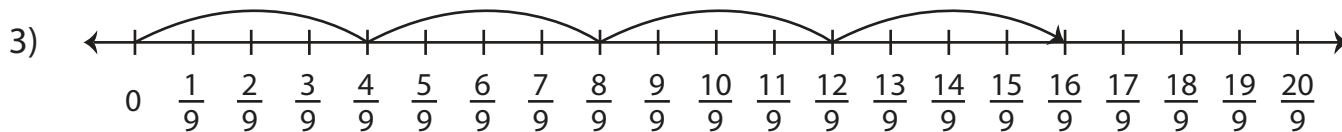
Complete each multiplication sentence using the number line.



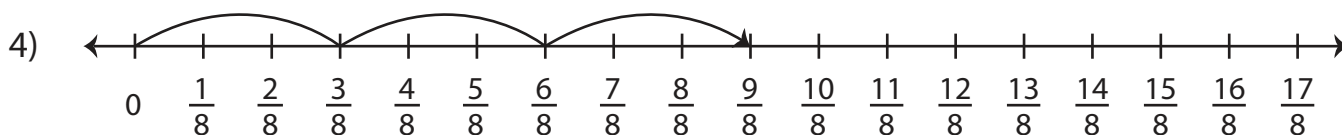
$$2 \times \frac{7}{2} = \underline{\hspace{2cm}}$$



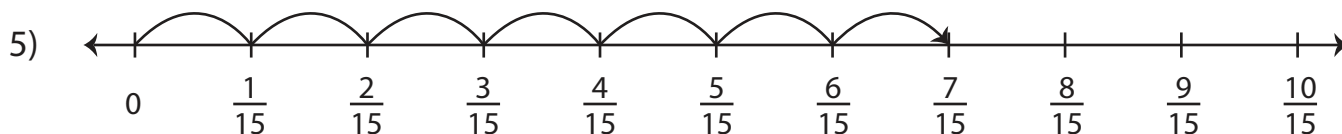
$$5 \times \frac{2}{12} = \underline{\hspace{2cm}}$$



$$4 \times \frac{4}{9} = \underline{\hspace{2cm}}$$



$$3 \times \frac{3}{8} = \underline{\hspace{2cm}}$$



$$7 \times \frac{1}{15} = \underline{\hspace{2cm}}$$