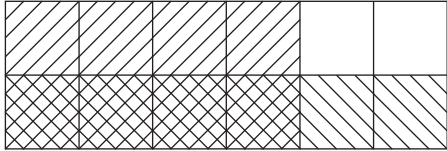


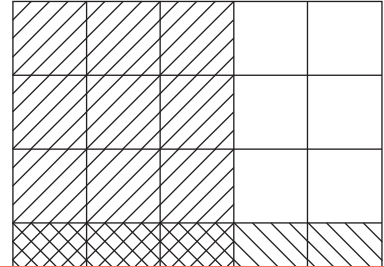
# Multiplying Fractions | Area Model

Complete each multiplication equation using the area model.

1)



2)



3)

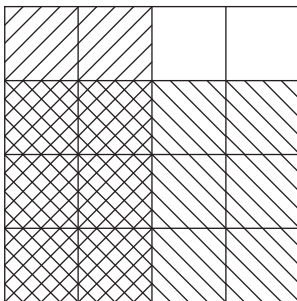
# Preview

Become a member to unlock  
unrestricted access to both printable  
and online worksheets.



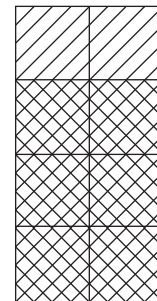
[www.tutoringhour.com](http://www.tutoringhour.com)

5)



$$\frac{2}{4} \times \underline{\hspace{2cm}} = \frac{6}{16}$$

6)



$$\underline{\hspace{2cm}} \times \frac{3}{4} = \frac{6}{8}$$