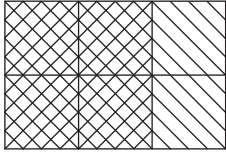


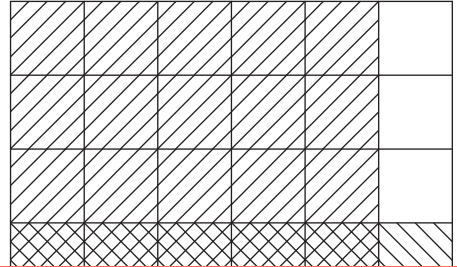
Multiplying Fractions | Area Model

Complete each multiplication equation using the area model.

1)



2)



3)

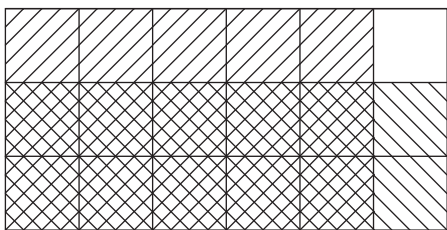
Preview

Become a member to unlock
unrestricted access to both printable
and online worksheets.

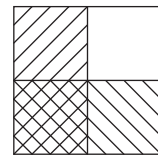


www.tutoringhour.com

5)



6)



$$\underline{\hspace{2cm}} \times \frac{2}{3} = \frac{10}{18}$$

$$\frac{1}{2} \times \underline{\hspace{2cm}} = \frac{1}{4}$$