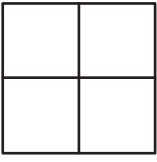


Halves, Thirds, and Fourths

A) Look at each model, and choose “halves”, “thirds”, or “fourths”.

1)



a) halves

b) fourths

c) thirds

2)



a) thirds

b) halves

c) fourths

3)

Preview

B)

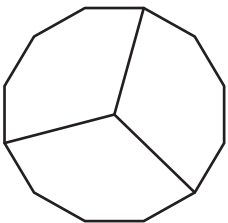
**Become a member to unlock
unrestricted access to both printable
and online worksheets.**



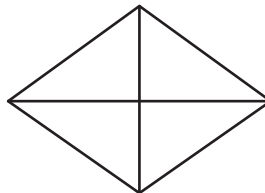
www.tutoringhour.com

C) Write whether each of the following shapes is divided into halves, thirds, or fourths.

1)



2)



3)

