



Equivalent Fractions | Fraction Bars

Write the equivalent-fraction sentence for each pair of fraction bars.

1)  = 

$\frac{\square}{\square} = \frac{\square}{\square}$

2)

Preview

3)

Become a member to unlock
unrestricted access to both printable
and online worksheets.



4)

www.tutoringhour.com



$\frac{\square}{\square} = \frac{\square}{\square}$

5)

 = 

$\frac{\square}{\square} = \frac{\square}{\square}$