



# Equivalent Fractions | Fraction Bars

Write the equivalent-fraction sentence for each pair of fraction bars.

1)  = 

$\frac{\square}{\square}$  =  $\frac{\square}{\square}$



2) **Preview**

3) **Become a member to unlock  
unrestricted access to both printable  
and online worksheets.**

4) [www.tutoringhour.com](http://www.tutoringhour.com)



$\frac{\square}{\square}$  =  $\frac{\square}{\square}$

5)  = 

$\frac{\square}{\square}$  =  $\frac{\square}{\square}$