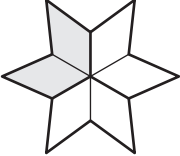

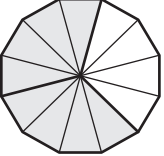



# Equivalent Fractions | Visual Models

Write the missing numbers to complete the given equivalent fractions.

1)   $\frac{2}{6} =$    $\frac{1}{\square}$


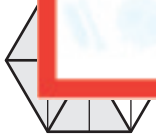
2)   $\frac{\square}{12} =$    $\frac{2}{3}$



# Preview



Become a member to unlock  
unrestricted access to both printable  
and online worksheets.

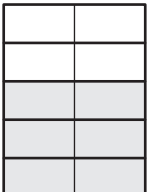

www.tutoringhour.com

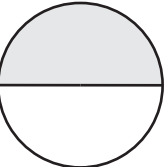
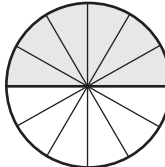


3)   $\frac{2}{8} =$    $\frac{4}{16}$

5)   $\frac{3}{12} =$    $\frac{2}{6}$

  $\frac{2}{10} =$    $\frac{1}{5}$

7)   $\frac{6}{\square} =$    $\frac{3}{5}$

8)   $\frac{\square}{2} =$    $\frac{6}{12}$