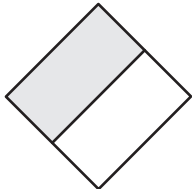
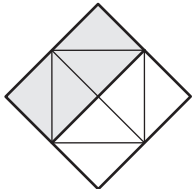




Equivalent Fractions | Visual Models

Write the missing numbers to complete the given equivalent fractions.

1)  $\frac{1}{2} =$  $\frac{\square}{8}$



2)  $\frac{\square}{9} =$  $\frac{1}{3}$



Preview

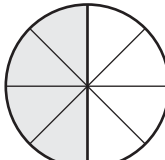
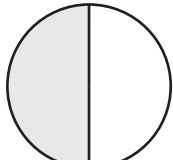
Become a member to unlock
unrestricted access to both printable
and online worksheets.

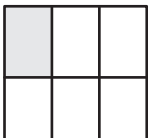
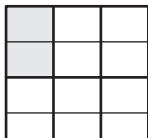
www.tutoringhour.com



3)  $\frac{1}{4} =$  $\frac{2}{10}$

5)  $\frac{3}{12} =$  $\frac{2}{6}$

7)  $\frac{\square}{8} =$  $\frac{1}{2}$

8)  $\frac{1}{6} =$  $\frac{\square}{12}$