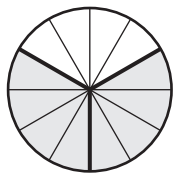


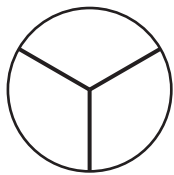
Equivalent Fractions | Pie Model

A) Shade each pie model to match the fraction shown and write the equivalent fraction.

1)

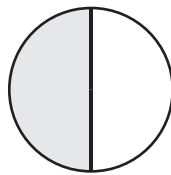


=

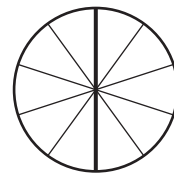
8

=

2)



=

1

=

3)

Preview

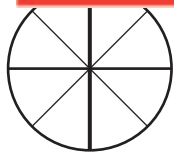
Become a member to unlock
unrestricted access to both printable
and online worksheets.



www.tutoringhour.com

B)

1)



=



=



3)

 $\frac{1}{3}$

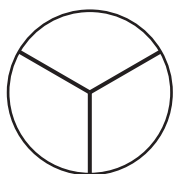
=

 $\frac{2}{6}$

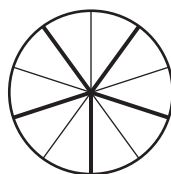
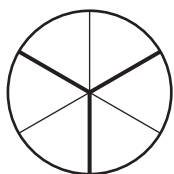
4)

 $\frac{4}{10}$

=

 $\frac{2}{5}$ 

=



=

