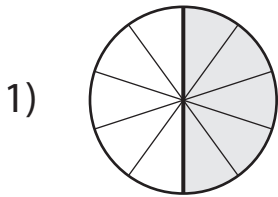
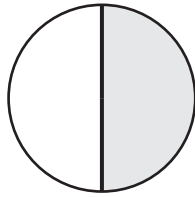


Equivalent Fractions | Visual Models

Compare each pair of fractions using = or \neq .

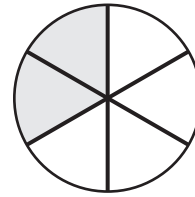


$$\frac{5}{10}$$

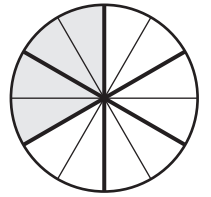


$$\frac{1}{2}$$

2)



$$\frac{2}{6}$$



$$\frac{4}{12}$$

3)

Preview

Become a member to unlock
unrestricted access to both printable
and online worksheets.

5)

www.tutoringhour.com

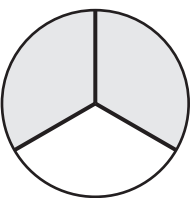
$$\frac{1}{4}$$

$$\frac{2}{8}$$

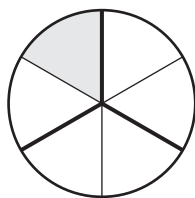
$$\frac{2}{5}$$

$$\frac{4}{10}$$

7)

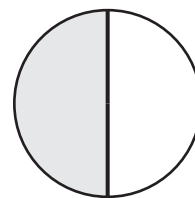


$$\frac{2}{3}$$

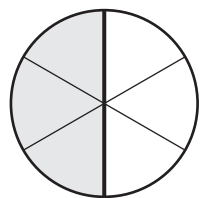


$$\frac{1}{6}$$

8)



$$\frac{1}{2}$$



$$\frac{3}{6}$$