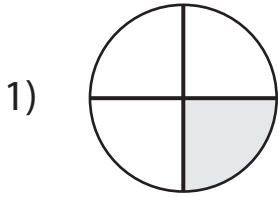
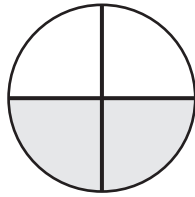


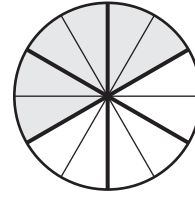
# Equivalent Fractions | Visual Models

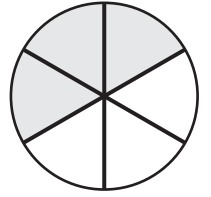
Compare each pair of fractions using = or  $\neq$ .


 $\frac{1}{4}$ 


 $\frac{2}{4}$ 

2)


 $\frac{6}{12}$ 


 $\frac{3}{6}$ 

3)

## Preview

Become a member to unlock  
unrestricted access to both printable  
and online worksheets.



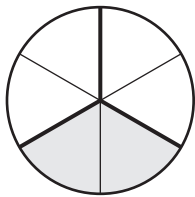
5)

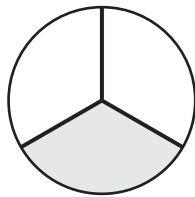
 $\frac{1}{5}$ 

 $\frac{0}{10}$ 
 $\frac{1}{3}$ 

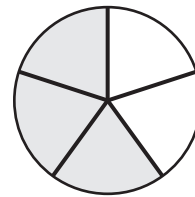
 $\frac{4}{12}$ 

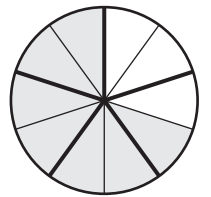
7)


 $\frac{2}{6}$ 


 $\frac{1}{3}$ 

8)


 $\frac{3}{5}$ 


 $\frac{7}{10}$