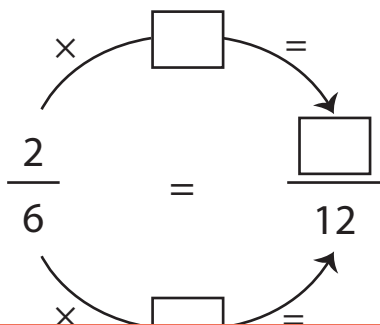
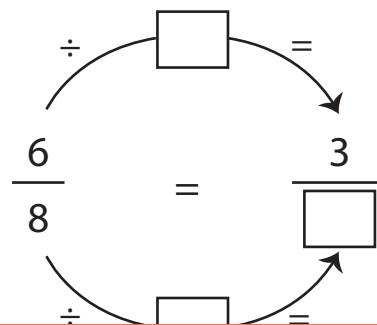


Finding Equivalent Fractions | Step by Step

1) $\frac{2}{6}$



2) $\frac{6}{8}$



Preview

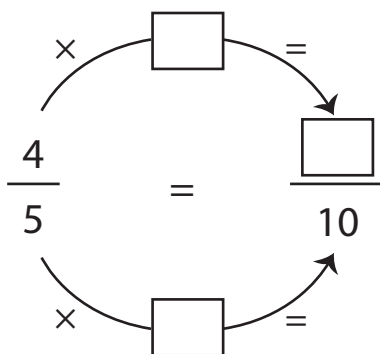
3)

Become a member to unlock
unrestricted access to both printable
and online worksheets.

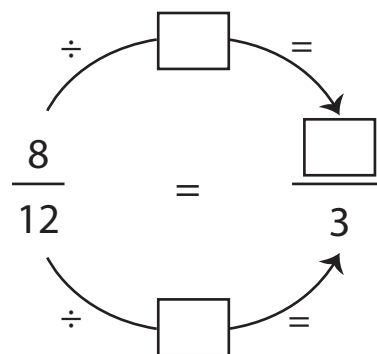


www.tutoringhour.com

5) $\frac{4}{5}$



6) $\frac{8}{12}$



Equivalent fraction: _____

Equivalent fraction: _____