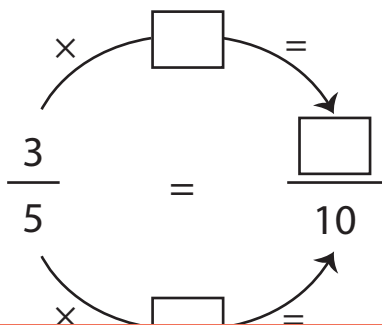
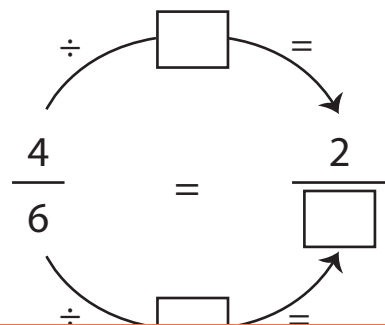


Finding Equivalent Fractions | Step by Step

1) $\frac{3}{5}$



2) $\frac{4}{6}$



3)

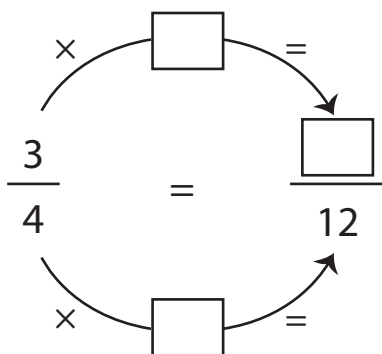
Preview

Become a member to unlock
unrestricted access to both printable
and online worksheets.

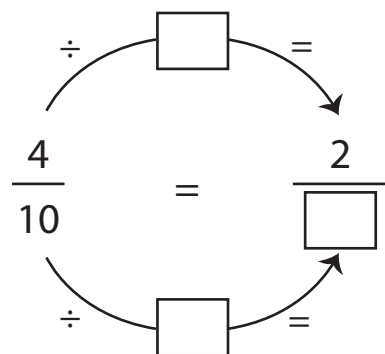


www.tutoringhour.com

5) $\frac{3}{4}$



6) $\frac{4}{10}$



Equivalent fraction: _____

Equivalent fraction: _____