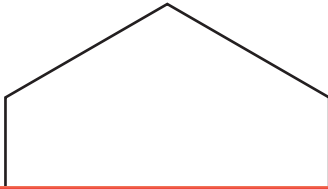


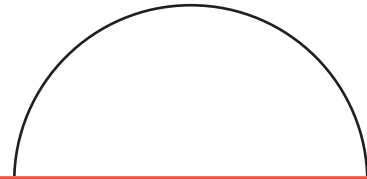
Partitioning Shapes into Equal Parts

Divide the shapes into equal parts as directed.

- 1) Draw lines to divide the hexagon into six triangles.



- 2) Draw a line to divide the circle into two semicircles.



Preview


- 3) D
fiv

**Become a member to unlock
unrestricted access to both printable
and online worksheets.**



www.tutoringhour.com

- 5) Draw lines to divide the square into four triangles.



- 6) Draw lines to divide the pentagon into ten triangles.

