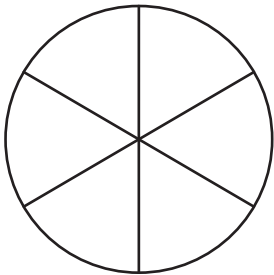


Identifying Equal Parts

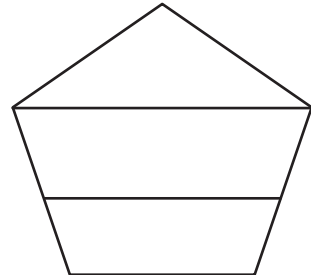
Determine if each given shape is divided into equal or unequal parts and check the appropriate option.

1)



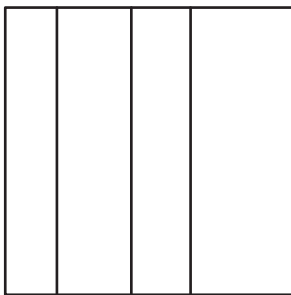
- Equal
 Unequal

2)




- Equal
 Unequal

3)



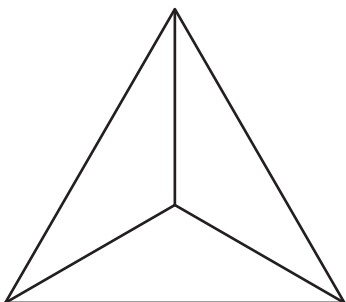
- Equal
 Unequal

4)



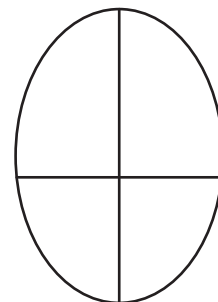
- Equal
 Unequal

5)



- Equal
 Unequal

6)



- Equal
 Unequal