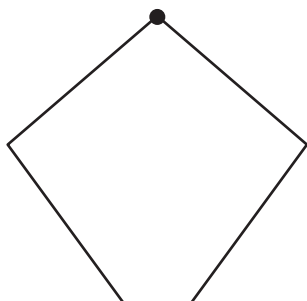
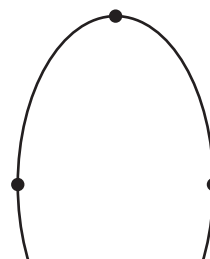


Partitioning Shapes into Equal Areas

1) a) Partition the kite into 2 equal areas.



2) a) Partition the oval into 4 equal areas.



Preview

Become a member to unlock
unrestricted access to both printable
and online worksheets.

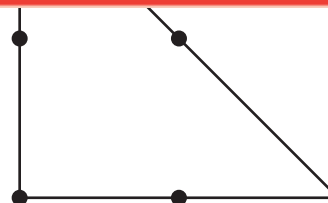
www.tutoringhour.com



3) a)



b) Express the area of each part as a unit fraction of the whole.



b) Express the area of each part as a unit fraction of the whole.
