



# Partitioning Shapes into Equal Areas

1) a) Partition the square into 4 equal areas.



2) a) Partition the heart into 2 equal areas.



b)

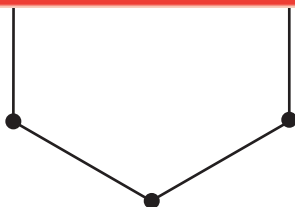
## Preview

Become a member to unlock  
unrestricted access to both printable  
and online worksheets.



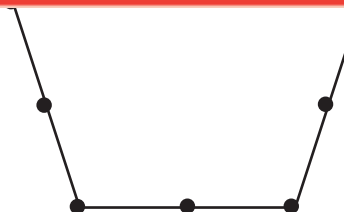
www.tutoringhour.com

3) a)



b) Express the area of each part as a unit fraction of the whole.

\_\_\_\_\_



b) Express the area of each part as a unit fraction of the whole.

\_\_\_\_\_